

Under the Sea I Spy and Add to 20


Count the number of each type of sea creature needed in the addition number sentence. Write the numbers in the boxes to create and then solve an addition number sentence.



+




=



+



=




+




=



+



=



+



=