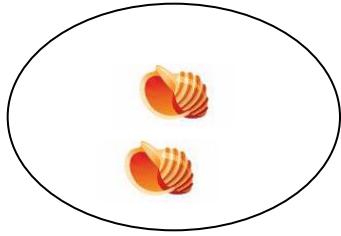
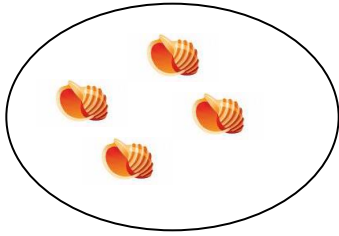


The Lighthouse Keepers Lunch Maths

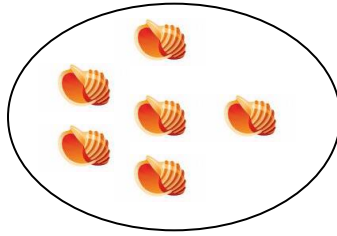
Mrs Grinling like to collect shells, below are the shells she had collected on different days.




Monday



Tuesday

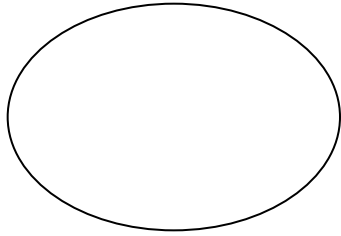


Wednesday

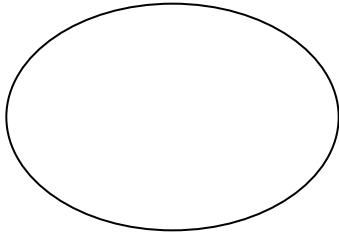


Thursday

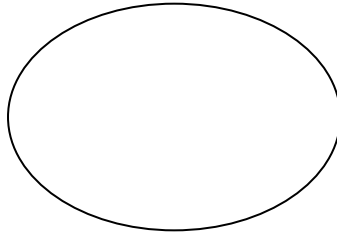
Guess how many you think she is going to collect on the next few days using the information above.



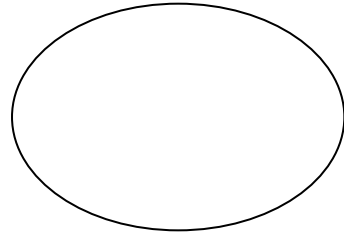
Friday



Saturday



Sunday



Monday

Mr Grinling is getting very upset with the seagulls, they just wont go away.

On Saturday 5 came to steal his lunch.



On Sunday 10 came to steal his lunch.

On Monday 15 came to steal his lunch.

Looking at the pattern above can you guess how many will visit on Tuesday and Wednesday.

Tuesday =

Wednesday =