

Maths Planning and Ideas



Week Monday 14. 09. 2020

Commencing: Year

Group: Year 4

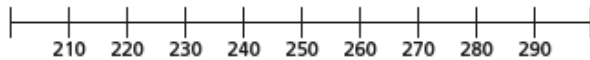
	Monday	Tuesday	Wednesday	Thursday	Friday
Area of Learning	<u>LC: Can you round to the nearest 100?</u>	<u>LC: Can you count in 1000s?</u>	<u>LC: Can you represent numbers to 1000?</u>	<u>LC: Can you read a four digit number?</u>	<u>LC: Can you problem solve?</u>
Activity	<p>Starter: Times Table Rockstars</p> <p>Main: Go to the following website: https://whiterosemaths.com/homelearning/year-4/week-1/ Find the video Round to the nearest 100 Watch the video. Pause if you need to take notes or replay sections to help with understanding.</p> <p>Independent Task: Children to complete activity found in resources.</p>	<p>Starter: Times Table Rockstars</p> <p>Main: Go to the following website: https://whiterosemaths.com/homelearning/year-4/week-2/ find the video Count in 1000s Watch the video. Pause if you need to take notes or replay sections to help with understanding.</p> <p>Independent Task: Children to complete activity found in resources.</p>	<p>Starter: Times Table Rockstars</p> <p>Main: Go to the following website: https://whiterosemaths.com/homelearning/year-4/week-2/ Find the video Represent numbers to a 1000 activity Watch the video. Pause if you need to take notes or replay sections to help with understanding.</p> <p>Independent Task: Children to complete activity found in the video.</p>	<p>Starter: Times Table Rockstars</p> <p>Main: Go to the following website: https://whiterosemaths.com/homelearning/year-4/week-2/ find the video 1000s, 100s, 10s and 1s Watch the video. Pause if you need to take notes or replay sections to help with understanding.</p> <p>Independent Task: Children to complete activity found in resources.</p>	<p>Starter: Times Table Rockstars</p> <p>Main: Children used there strategies to problem solve the challenges.</p> <p>Independent Task: Children to complete activity found in resources.</p>

14.09.2020

LC: can you round to the nearest 1000?



- 1 a) Which multiples of 100 do the numbers sit between?
Complete the number line.



- b) Circle the number 270 on the number line.

Which multiple of 100 is 270 closest to?

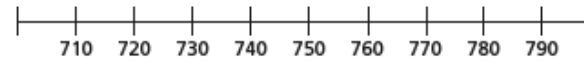
270 rounded to the nearest 100 is

- c) Circle the number 230 on the number line.

Which multiple of 100 is 230 closest to?

230 rounded to the nearest 100 is

- 2 a) Which multiples of 100 do the numbers sit between?
Complete the number line.



- b) Draw an arrow and label 713 on the number line.



- c) Which multiple of 100 is 713 closest to?

713 rounded to the nearest 100 is

- d) Round each number to the nearest 100

725

701

749

779

751

750

- 3 Round each number to the nearest 100

a) 401

d) 190

g) 250

b) 789

e) 89

h) 44

c) 330

f) 708



i) 99

4 Round each number to the nearest 100


a) 

b) 712

c)

H	T	O
		

d) XXIX

e) 

f) CXVIII

5 Circle the numbers that round to 300 to the nearest 100

359 279 271 341 350 250

6 Circle the numbers that round to 200 to the nearest 100

150 207 196 249 250 190

7 Complete the table.

Number	624	371	289	750	38
Rounded to the nearest 10					
Rounded to the nearest 100					

8 There are 400 children in a school, to the nearest 100

What is the least number of children in the school?

What is the greatest number of children in the school?

9 Annie is thinking of a number.



My number rounds to 300 to the nearest 10 and to the nearest 100

What number could Annie be thinking of?

Is this the only answer? Talk about it with a partner.

15.09.2020

LC: Can you count in 1,000s?



1 How many sweets are there?



Write your answer in numerals and words.

There are sweets.

There are _____ sweets.

2 Class 4B are collecting pennies in jars.

Each jar contains 1,000 pennies.




How many pennies are there in total?

Write your answer in numerals and words.


There are pennies.

There are _____ pennies.

3 What numbers are represented?



4 Circle 9,000



5 Complete the number tracks.


2,000	3,000			6,000		
-------	-------	--	--	-------	--	--

9,000		7,000		5,000	
-------	--	-------	--	-------	--

- 6 Eva starts from zero and counts up in 1,000s.
Circle all the numbers that she says.


5,000 6,000 1,500 3,999
1,000 10,000 15,000 700

- 7 How many thousands are represented?




Explain how you know.

- 8 Circle 1,000



- 9



Is Rosie correct?
How do you know?

- 10 Dexter and Amir collect stickers.
Each sticker is worth 1,000 points.



a) Dexter collects 9 stickers.
How many points does he have?

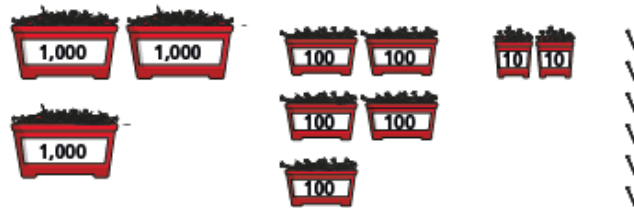
b) Amir has 4 more stickers than Dexter.
How many points does Amir have?

17.09.2020

LC: Can you read four-digit numbers?




1 How many nails are there?



There are nails.

2 What numbers are represented?

a)



b)

Th	H	T	O

3 Mo is trying to make the number 3,250

He represents it on a place value chart.

Th	H	T	O

Is Mo correct?

How do you know?

4 Use base 10 or place value counters to make these numbers.

- a) 2,391 b) 1,050 c) 3,303



5 What number is represented?

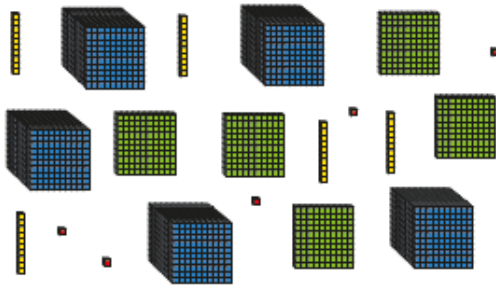
Th	H	T	O
1,000 1,000	100 100 100	10 10 10 10 10 10	1 1 1 1 1

Write your answer in numerals.

Write your answer in words.

6 Circle the base 10 or counters to show each number.

a) 2,053



b) 5,124



7 Write the value of the digit in bold.

a) **7**,120 _____

b) 3,**9**15 _____

c) 2,**0**04 _____

d) **6**71 _____

e) 5,**9**18 _____

8 Write a 4-digit number with 7 tens.

Write a 3-digit number with 7 tens.

Write a 2-digit number with 7 tens.

9 Here are some clues to a 4-digit number.

- There are 6 hundreds.
- There are more tens than ones.
- The sum of the digits is 12

What could the number be? How many possible numbers can you find?





REASONING 1

Which numbers could go in the boxes?



Explain why!

REASONING 2

A number is rounded to the nearest 10 and the answer is 30.



There are 5 possible answers:
30, 31, 32, 33 and 34.

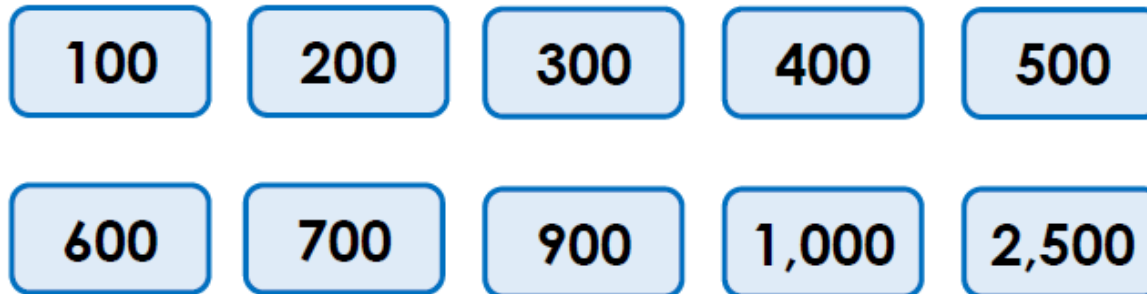
Do you agree with Marlon?





PROBLEM SOLVING 1

Using these 4 digit cards, make numbers that round to these multiples of 100!



Find all possibilities.





YR4 PROGRESSION IN MASTERY LESSON PACK - COUNTING IN 1,000s

REASONING 1

Always, Sometimes or Never?



When counting in 1,000s,
6,000 comes after 5,000.

Explain your reasoning.

REASONING 2

Asha says...



If you count from zero in
thousands, you will never
say an odd number

Prove why she is correct.

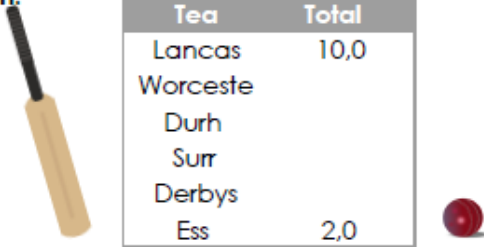
PROBLEM SOLVING 1

The table below shows the number of runs 6 teams scored in a single cricket league season.
Each team had a different number of total runs and were ranked in order of points.

Worcester scored an odd number of thousand runs.

Derbyshire scored 1 thousand more runs than Essex.

In the table, there is a sequence of three consecutive thousand numbers.



Team	Total
Lancas	10,0
Worceste	
Durh	
Surr	
Derbys	
Ess	2,0
ex	00

Can you work out how many runs
each team scored? Are there
multiple possibilities?





Friday challenge COUNTING IN 1,000s



Team	Total runs
Lancashire	10,000
Worcestershire	
Durham	
Surrey	
Derbyshire	
Essex	2,000



Can you work out how many runs each team scored?

Are there multiple possibilities?



© Copyright Deepening Understanding LTD 2019
Photocopiable for educational purposes only