


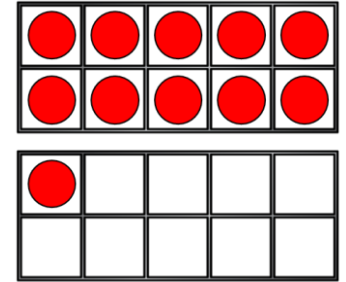
Flashback 4

Year 1 | Week 10 | Day 1


1) What shape comes next?



 or 
cone or cube



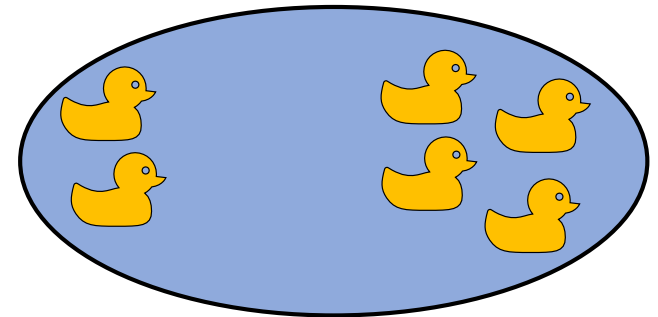
2) What shape is this?




3) First, there are 4 ducks.

Then, 2 more ducks come.

How many ducks are there now?

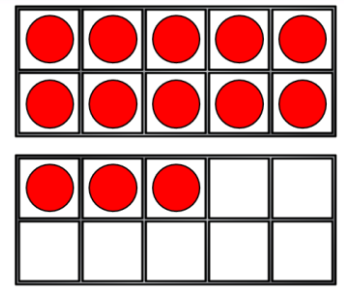


4) What is double 4?

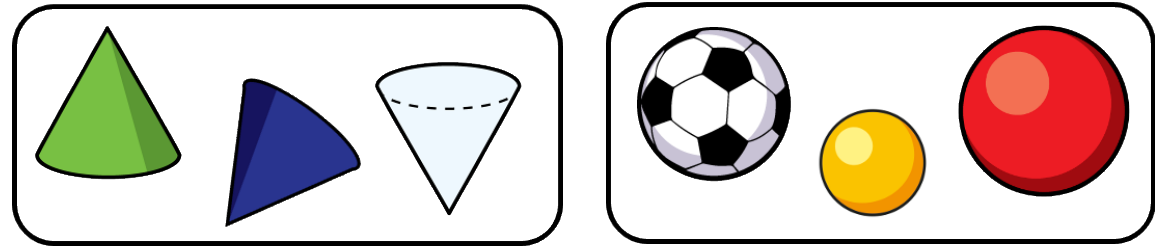


Flashback 4

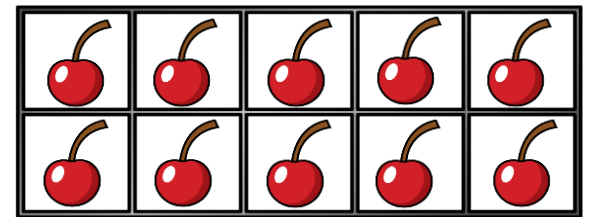
1) What number is this?



2) How have these shapes been sorted?




3) Annie has 10 cherries.
She eats 4 cherries.
How many cherries are left?



4) is double 2

1) Write the number 8 as a word.



2) What shape is this?



3) Tommy has 9 cookies. 

Amir has 6 cookies. 

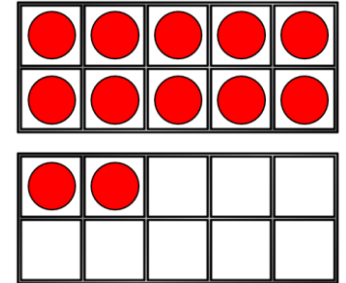

How many more cookies does Tommy have than Amir?

4) Double 7 is

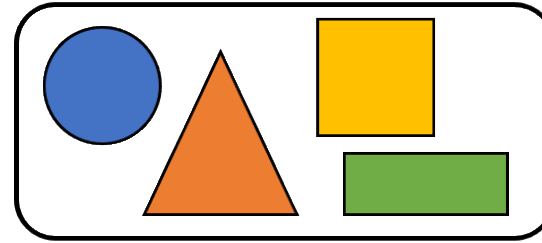
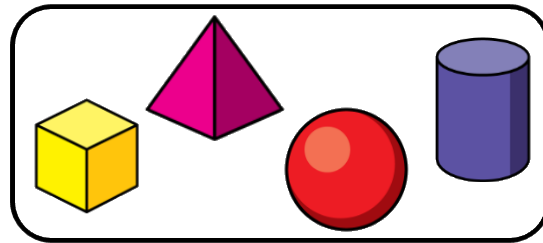
Flashback 4

Year 1 | Week 10 | Day 4

1) What number is this?




2) How have these shapes been sorted?



3) Use $<$ or $>$ to compare.

$$5 + 4 \bigcirc 10$$

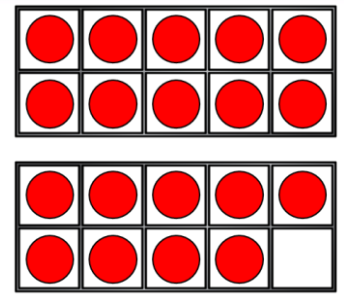

4) What is double 5?




Flashback 4

1) Complete.

13 = ten and ones.



2) Draw the next two shapes in this pattern.



3) Use $<$ or $>$ to compare. $10 - 2$ $10 - 6$

4) What is double 3?