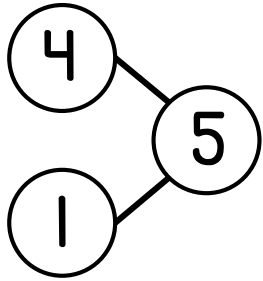


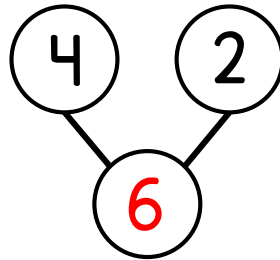
1) Write the fact family.



$$1 + 4 = 5 \quad 5 = 1 + 4$$

$$4 + 1 = 5 \quad 5 = 4 + 1$$


2) What is the whole?



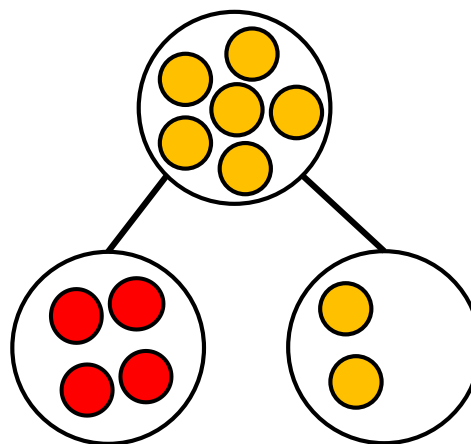
3) What is one more than 2? 3

4) Write the number eight as a numeral. 8

1) $3 + \boxed{2} = 5$




2) Draw the missing part.



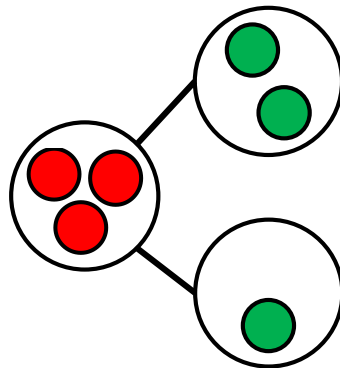
3) What is one less than 2? |

4) One more than 9 is 10


1) $5 + \boxed{5} = 10$



2) Draw the whole.




3) Is there a key for each house? **No**



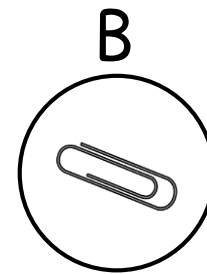
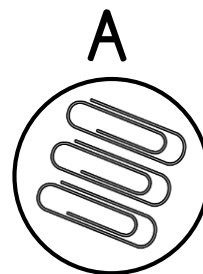
4) One less than four is three.

1) $\boxed{10} = 1 + 9$



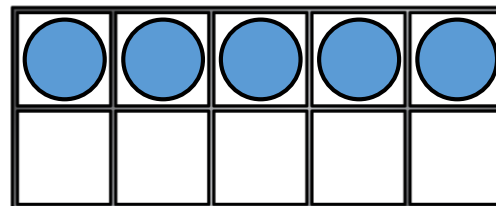
2) Work out $8 + 0$ **8**

3) Use more or fewer to complete the sentence.



Group B has fewer than group A.


4) What number is shown? **5**



Flashback 4

Year 1 | Week 6 | Day 5

- 1) Use greater or less to complete the sentence.



$3 + 4$ is greater than $3 + 2$

- 2) Work out $7 + 1$ 8

- 3) Use $<$ or $>$ to compare.

$10 > 6$

- 4) Draw 9 counters.

