




1) Use the formula $A = lw$ to work out the value of A when $l = 6$ and $w = 8$

2) What might the rule be for this function machine?



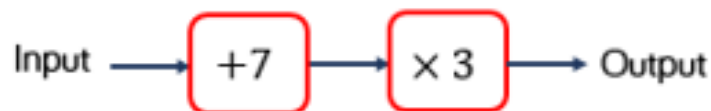
3) Write $\frac{2}{5}$ as a decimal

4) Divide 2394 by 7

- 1) Write an equation for the word problem.
“I think of a number, add 4, the answer is 9”



- 2) What is the output if the input is 13?



- 3) Write 0.7 as a fraction
- 4) Find the area of a square with side lengths 16 cm



- 1) Solve the equation $3x = 24$
- 2) If $y = 9$, what is the value of $19 - y$?
- 3) Convert $\frac{16}{100}$ to a decimal.
- 4) Round 736, 128 to the nearest ten thousand.



- 1) Solve the equation $5x + 3 = 38$
- 2) What might the rule be for this function machine?
50 \longrightarrow \longrightarrow 10
- 3) Work out $19.64 \div 4$
- 4) What number is 6 less than 2?


Flashback 4

Year 6 | Friday | Day 5



1) If $a + b = 8$, what might a and b be?

2) What is the input if the output is 40?



3) Work out 3.67×6

4) Add $3\frac{3}{5}$ to $4\frac{7}{10}$